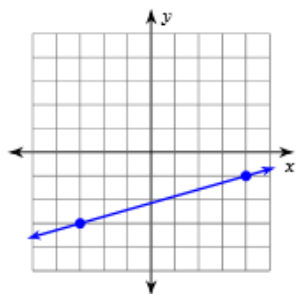


## 5.3 Finding Slope

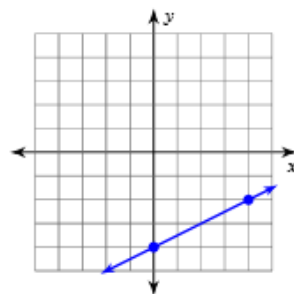
Date \_\_\_\_\_ Period \_\_\_\_\_

Find the slope of each line.

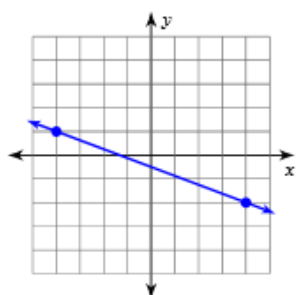
1)



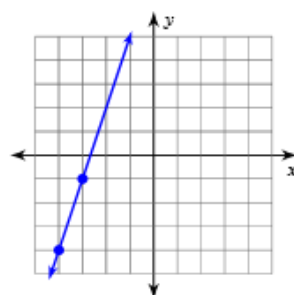
2)



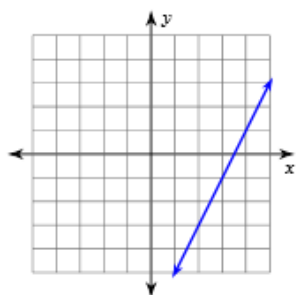
3)



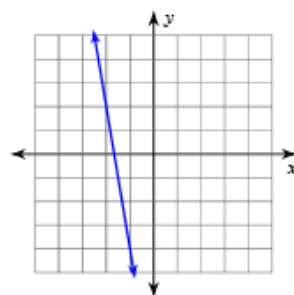
4)



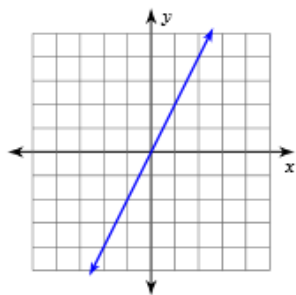
5)



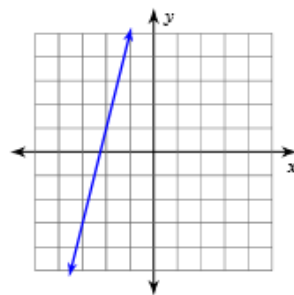
6)



7)



8)



Find the slope of the line through each pair of points.

9)  $(0, -18), (14, -5)$

10)  $(5, 8), (4, 5)$

11)  $(-9, 20), (4, 20)$

12)  $(-14, -5), (-14, -18)$

13)  $(4, 11), (5, 10)$

14)  $(13, 18), (13, -5)$

15)  $(2, 7), (-16, 1)$

16)  $(-6, 17), (-1, -1)$