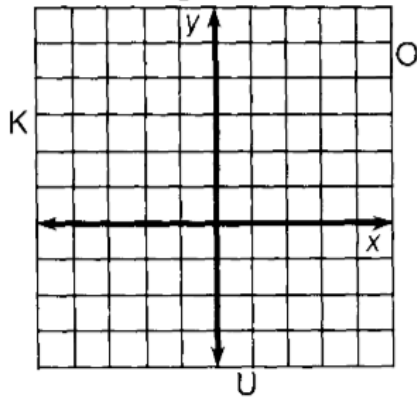


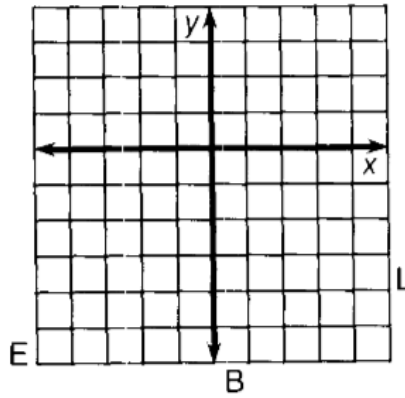
Whom Should You See at the Bank If You Need To Borrow Money?

Use the slope and y -intercept to graph each equation below. The graph, if extended, will cross a letter. Print this letter in each box that contains the number of that exercise.

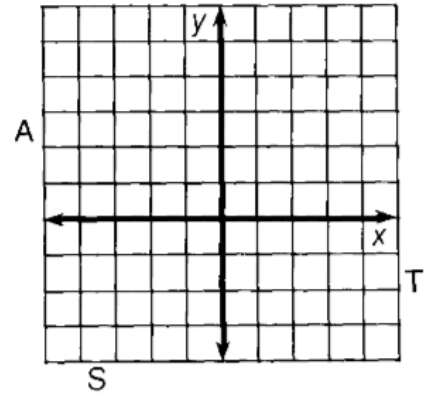
① $y = \frac{2}{3}x + 1$



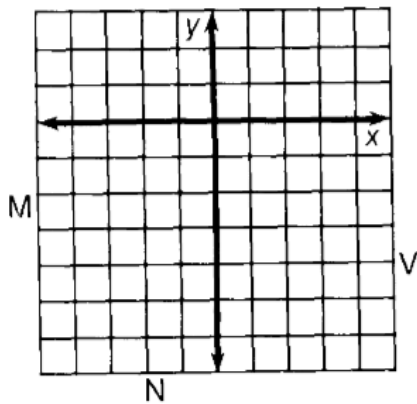
② $y = \frac{1}{2}x - 3$



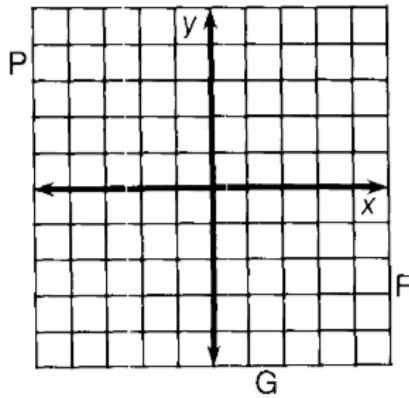
③ $y = -\frac{3}{4}x + 2$



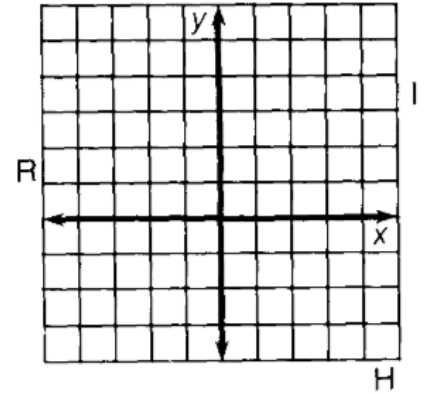
④ $y = 2x - 4$



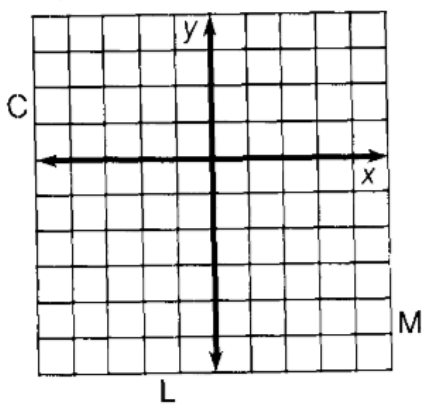
⑤ $y = -3x - 1$



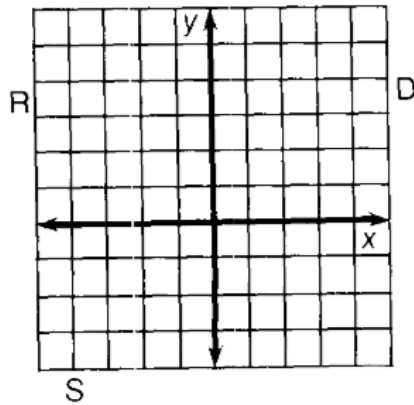
⑥ $y = -\frac{3}{2}x + 3$



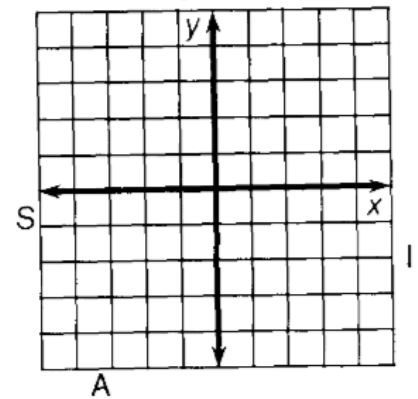
⑦ $y = 4x - 2$



⑧ $y = -\frac{1}{4}x + 2$



⑨ $y = \frac{5}{3}x$

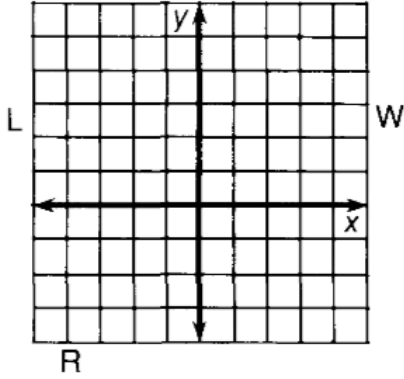


3	6	2	7	1	9	4	9	8	8	9	4	5	2	8
---	---	---	---	---	---	---	---	---	---	---	---	---	---	---

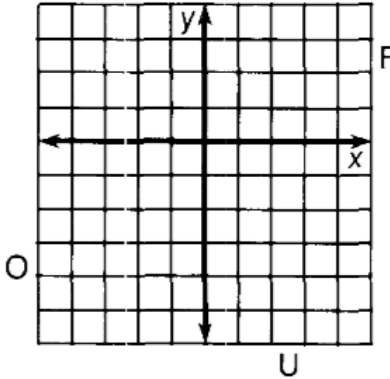
Why Does a Poor Man Drink Coffee ?

Use the slope and y -intercept to graph each equation below. The graph, if extended, will cross a letter. Print this letter in each box that contains the number of that exercise.

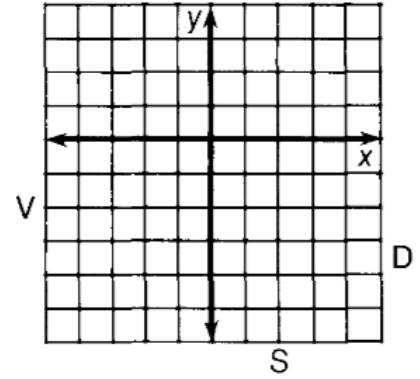
① $-3x + 2y = 2$



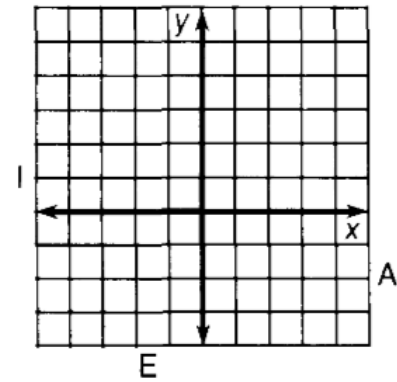
② $x - 4y = 8$



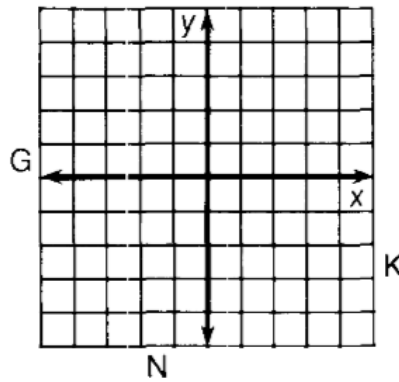
③ $2x + y = -3$



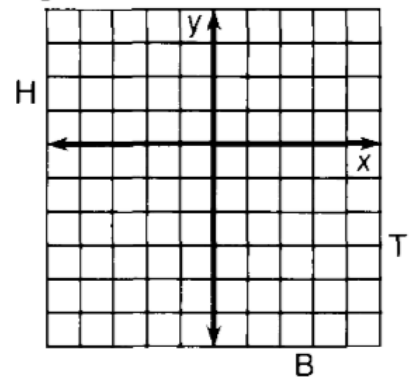
④ $2x + 3y = 6$



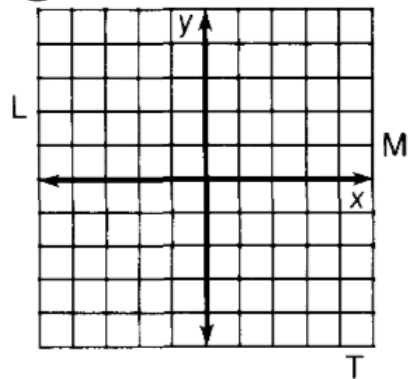
⑤ $3x - y = 1$



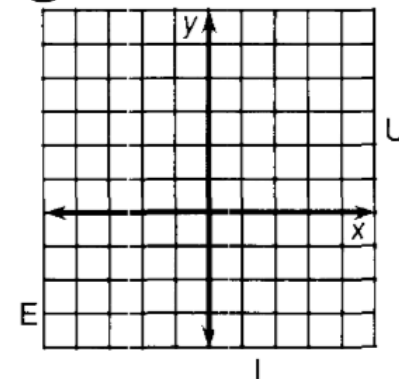
⑥ $-3x - 5y = 10$



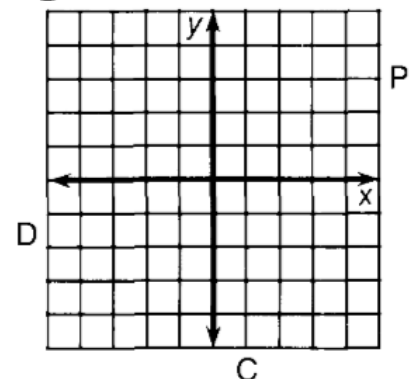
⑦ $4x + 3y = 0$



⑧ $2x - 2y + 5 = 0$



⑨ $y - 3 = 0$



6	8	6	4	3	5	2	9	1	2	9	8	1	7	8	4
---	---	---	---	---	---	---	---	---	---	---	---	---	---	---	---