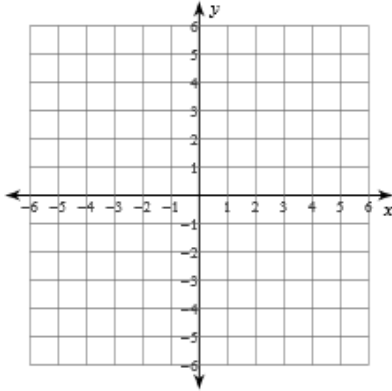


Assignment

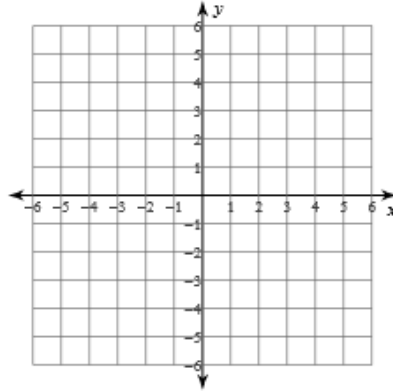
Date _____ Period _____

Sketch the graph of each line.

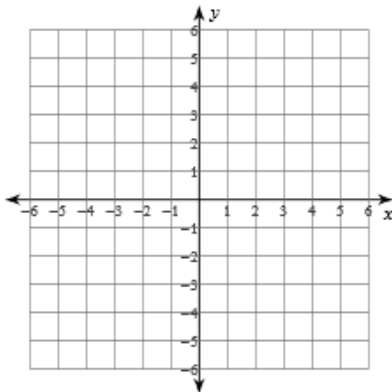
1) $y = -5x - 2$



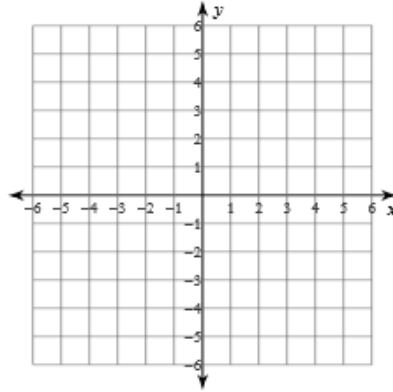
2) $y = 2x + 5$



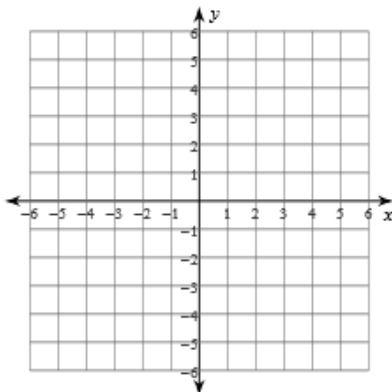
3) $y = -\frac{1}{3}x + 3$



4) $y = 6x + 5$



5) $y = \frac{6}{5}x - 2$



6) $y = \frac{1}{5}x$

