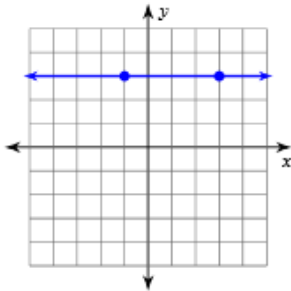


Assignment

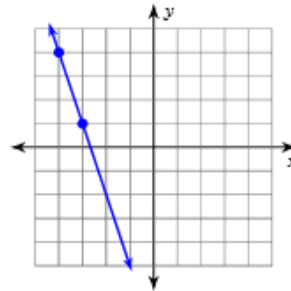
Date _____ Period _____

Find the slope of each line.

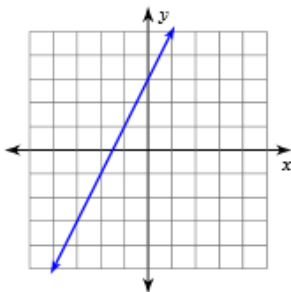
1)



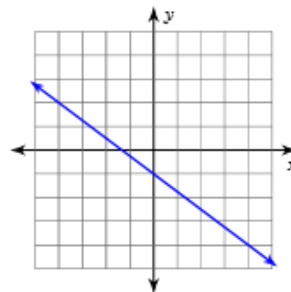
2)



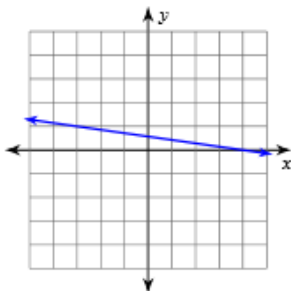
3)



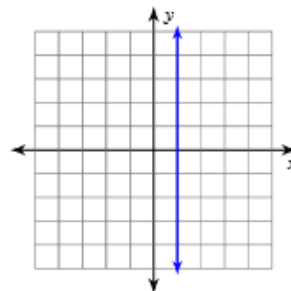
4)



5)



6)



Find the slope of the line through each pair of points.

7) $(-5, 12), (-13, 13)$

8) $(15, -1), (15, 17)$

9) $(8, 19), (-14, -12)$

10) $(-3, 17), (18, -15)$

11) $(-13, -12), (-9, -19)$

12) $(3, 7), (11, 3)$

13) $(-13, 11), (17, -9)$

14) $(6, 6), (-3, -12)$

15) $(5, -4), (15, 7)$

16) $(14, 20), (9, 15)$

17) $(-15, 12), (-13, -9)$

18) $(-2, 5), (18, -19)$